

Date: _____

Name: _____ # _____


Area Model Multiplication

1-Digit by 2-Digit

1. Find the product of 5×29 .

+ _____


$5 \times 29 =$ _____



2. Find the product of 3×78 .

+ _____


$3 \times 78 =$ _____



3. Find the product of 4×56 .

+ _____

$4 \times 56 =$ _____



4. Find the product of 7×39 .

+ _____

$$7 \times 39 = \underline{\hspace{2cm}}$$

	X	30	9
7			

5. Find the product of 8×94 .

+ _____

$$8 \times 94 = \underline{\hspace{2cm}}$$

	X	90	4
8			

6. Find the product of 9×42 .

+ _____

$$9 \times 42 = \underline{\hspace{2cm}}$$

	X	40	2
9			

Date: _____

Name: _____ # _____

Area Model Multiplication

1-Digit by 2-Digit

1. Find the product of 5×84 .

+ _____

$5 \times 84 =$ _____

X

--	--

2. Find the product of 6×32 .

+ _____

$6 \times 32 =$ _____

X

--	--

3. Find the product of 7×59 .

+ _____

$7 \times 59 =$ _____

X

--	--

4. Find the product of 3×98 .

+ _____

$3 \times 98 =$ _____

X

--	--

5. Find the product of 9×37 .

+ _____

$9 \times 37 =$ _____

X

--	--

1. Find the product of 4×71 .

+ _____

$4 \times 71 =$ _____

X

--	--

Date: _____

Name: _____ # _____

Area Model Multiplication

1-Digit by 2-Digit

Find the product of _____ X _____.

+ _____

X

--	--

_____ X _____ = _____

Find the product of _____ X _____.

+ _____

X

--	--

_____ X _____ = _____

Find the product of _____ X _____.

+ _____

X

--	--

_____ X _____ = _____

Find the product of _____ X _____.

+ _____

X

--	--

_____ X _____ = _____

Find the product of _____ X _____.

+ _____

X

--	--

_____ X _____ = _____

Find the product of _____ X _____.

+ _____

X

--	--

_____ X _____ = _____